


LESSON 40 WORKBOOK

BRENDEN LOWE


WRITE THE (3 DIM, 4 MAJ) HEXATONIC TRIADS OVER ALL SUS 7TH CHORDS

Csus7 Fsus7 B^bsus7 E^bsus7




A musical staff in 4/4 time with a treble clef. The first measure contains a C⁷ chord with a flat sign above the staff. The second measure contains an F⁷ chord. The third and fourth measures are empty for student input.

A^bsus7 D^bsus7 G^bsus7 B⁷sus7



A musical staff in 4/4 time with a treble clef. The first measure contains an A^b chord with a flat sign above the staff. The second measure contains a D^b chord with a flat sign above the staff. The third and fourth measures are empty for student input.

E⁷sus7 A⁷sus7 D⁷sus7 G⁷sus7



A musical staff in 4/4 time with a treble clef. The first measure contains an E⁷ chord. The second measure contains an A⁷ chord. The third and fourth measures are empty for student input.