

WORKBOOK LESSON 1

BRENDEN LOWE

WHOLE AND HALF STEPS


DRAW A WHOLE STEP UP FROM THE GIVEN NOTE AND WRITE THE NAME BELOW



A musical staff in treble clef with a 2/4 time signature. The notes are: C4, D4, E4, F4, G4, A4, Bb4, C#5, D5, Eb5, F5, G5. The notes C and D are underlined.

C D


DRAW A WHOLE STEP DOWN FROM THE GIVEN NOTE AND WRITE THE NAME BELOW



A musical staff in treble clef with a 2/4 time signature. The notes are: C4, Bb3, A3, G3, F3, E3, D3, C#3, B2, Ab2, G2, F2. The note C#3 is underlined.

10

DRAW A HALF STEP UP FROM THE GIVEN NOTE AND WRITE THE NAME BELOW




A musical staff in treble clef with a 2/4 time signature. The notes are: C4, C#4, D4, E4, F4, G4, A4, Bb4, B4, C5, C#5. The note C#4 is underlined.

19

C C#

DRAW A HALF STEP DOWN FROM THE GIVEN NOTE AND WRITE THE NAME BELOW



A musical staff in treble clef with a 2/4 time signature. The notes are: C4, B3, A3, G3, F3, E3, D3, C#3, B2, Ab2, G2, F2. The note B3 is underlined.

28

C B